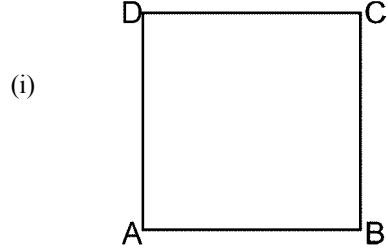


|                         |                     |                        |
|-------------------------|---------------------|------------------------|
| <b>Time: 10 Minutes</b> | <b>Paper Math 3</b> | <b>Total Marks: 10</b> |
|-------------------------|---------------------|------------------------|


|                              |                                |
|------------------------------|--------------------------------|
| 6th Month, 1st Week, 6th Day | <b>Syllabus:</b> Revision Test |
|------------------------------|--------------------------------|

**Q.1. Write name of the figure, measure the length of its sides then find the perimeter of following. (15)**

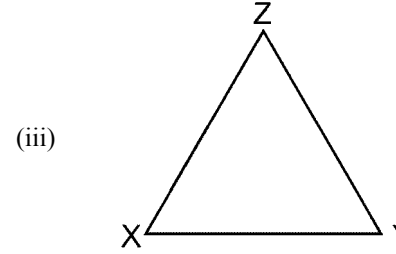
شکل کا نام لکھیں۔ اضلاع کی لمبائیوں کی پیمائش کریں اور احاطہ معلوم کریں۔



Name = \_\_\_\_\_  
 AB = \_\_\_\_\_  
 BC = \_\_\_\_\_  
 CD = \_\_\_\_\_  
 AD = \_\_\_\_\_  
 Perimeter = \_\_\_\_\_




Name = \_\_\_\_\_  
 PQ = \_\_\_\_\_  
 QR = \_\_\_\_\_  
 RS = \_\_\_\_\_  
 PS = \_\_\_\_\_  
 Perimeter = \_\_\_\_\_





Name = \_\_\_\_\_  
 XY = \_\_\_\_\_  
 YZ = \_\_\_\_\_  
 XZ = \_\_\_\_\_  
 Perimeter = \_\_\_\_\_

**Q.2. Identify point, line, line segment and ray. (10)**


قطعہ خط اور شعاع کی نشان دہی کریں۔













---



---



---